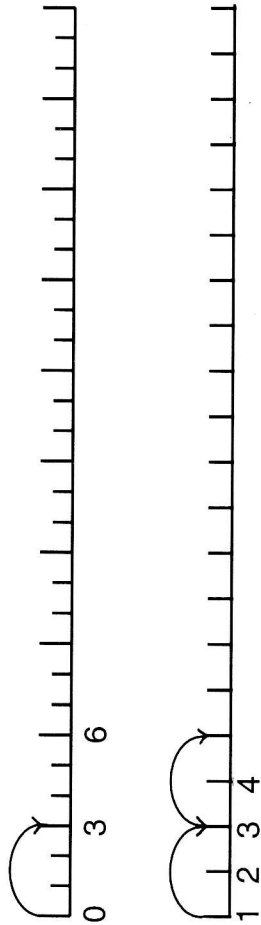
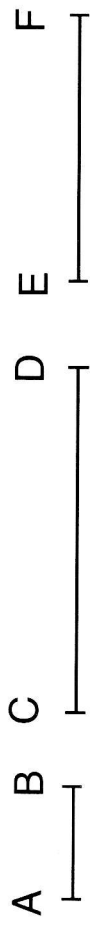


4. Dopln: Skáčeme se žábou, kreslíme čáry.
(rovné, křivé, lomené?)



5. Změřte v milimetrech. 1cm = 10mm



|AB| = 15mm

|CD| = _____

|EF| = _____

|GH| = _____

|IJ| = _____

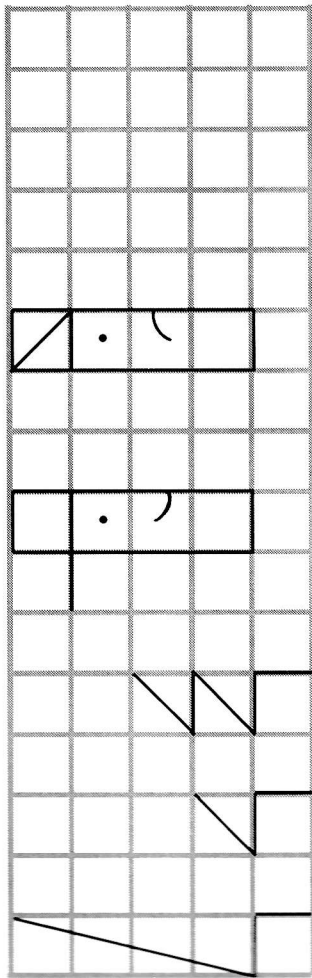
|KL| = _____

|MN| = _____

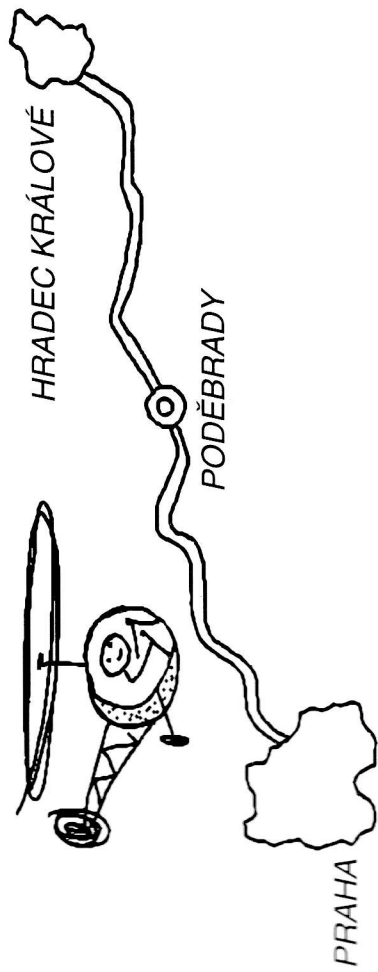
|OP| = _____

Souměrný tvar

1. Dokresli.




2. Nakresli cestu z Prahy do Hradce Králové, poletíš-li vrtulníkem.



3. Cestuj po čtvercové síti podle programu od bodu A.

→ ↑↑ → → ↓ → → ↑↑↑ → → ↓↓ → → → → → →



Kam jsi došel?